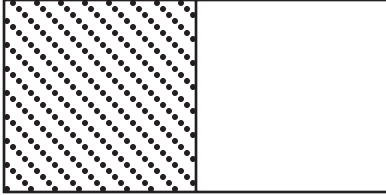


# MathFLIX CHALLENGE

## Visuals of Equivalent Fractions, Decimals & Percents


Complete the information beneath each picture and then color in the sections so they illustrate the math statement.



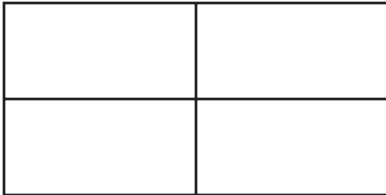
Fraction	Decimal	Percent
$\frac{1}{2}$	.5	50%




Fraction	Decimal	Percent
$\frac{2}{2}$	1.0	100%



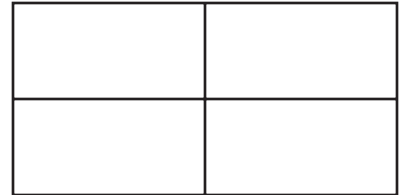
Fraction	Decimal	Percent
$\frac{1}{4}$	___	25%




Fraction	Decimal	Percent
$\frac{2}{4}$	___	___




Fraction	Decimal	Percent
$\frac{3}{3}$	___	___




Fraction	Decimal	Percent
$\frac{3}{4}$	___	___



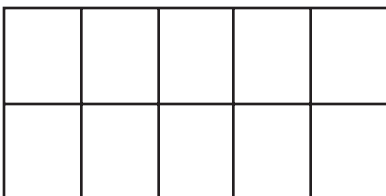
Fraction	Decimal	Percent
$\frac{1}{5}$	___	___



Fraction	Decimal	Percent
$\frac{3}{5}$	___	___



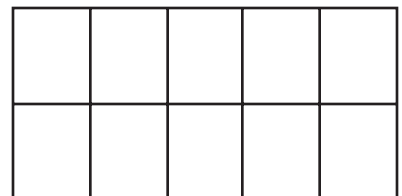
Fraction	Decimal	Percent
___	___	80%



Fraction	Decimal	Percent
___	___	50%



Fraction	Decimal	Percent
___	.60	___



Fraction	Decimal	Percent
___	___	80%