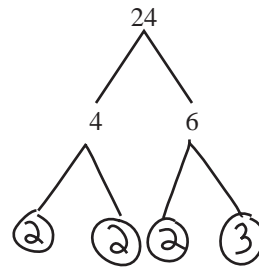
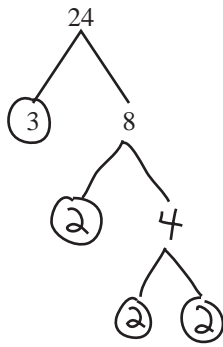
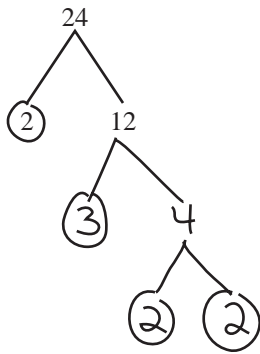


# COUNTDOWN CHALLENGE

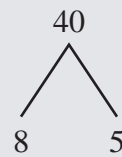
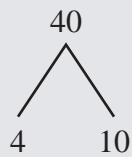
## Prime Factorization

Complete the different factor trees and give the prime factorization.



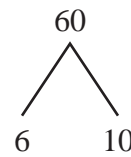
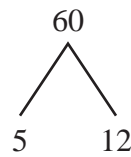
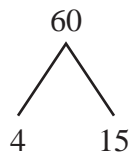
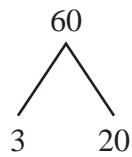
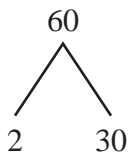
Prime Factorization

$$2^3 \cdot 3^1$$



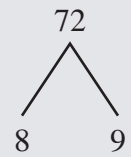
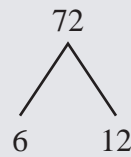
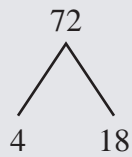
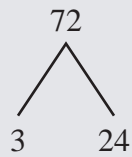
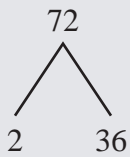
Prime Factorization

\_\_\_\_\_



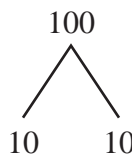
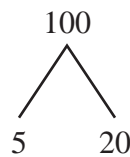
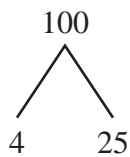
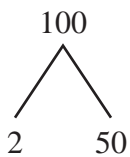
Prime Factorization

\_\_\_\_\_



Prime Factorization

\_\_\_\_\_



Prime Factorization

\_\_\_\_\_