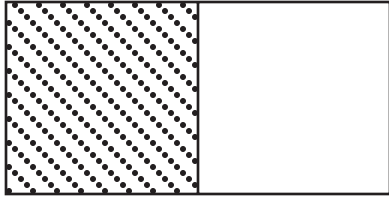


COUNTDOWN Challenge

Equivalence of Fractions, Decimals & Percents


Complete the information beneath each picture and then color in the sections so they illustrate the math statement.



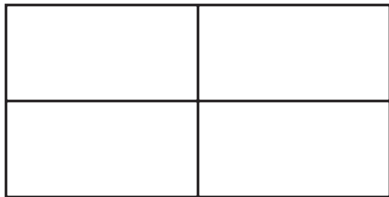
Fraction	Decimal	Percent
$\frac{1}{2}$.5	50%




Fraction	Decimal	Percent
$\frac{2}{2}$	1.0	100%



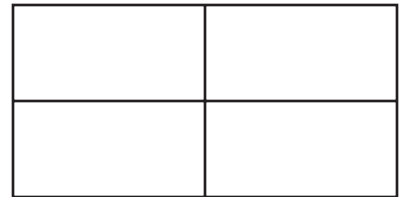
Fraction	Decimal	Percent
$\frac{1}{4}$	—	25%




Fraction	Decimal	Percent
$\frac{2}{4}$	—	—




Fraction	Decimal	Percent
$\frac{3}{3}$	—	—




Fraction	Decimal	Percent
$\frac{3}{4}$	—	—



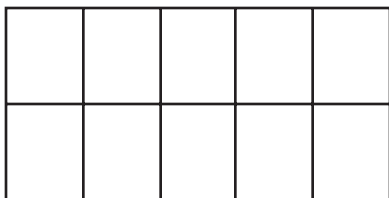
Fraction	Decimal	Percent
$\frac{1}{5}$	—	—



Fraction	Decimal	Percent
$\frac{3}{5}$	—	—



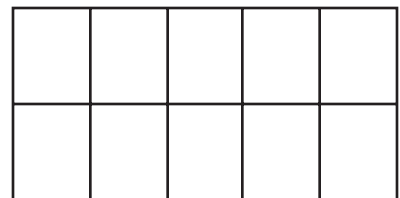
Fraction	Decimal	Percent
—	—	80%



Fraction	Decimal	Percent
—	—	50%



Fraction	Decimal	Percent
—	.60	—



Fraction	Decimal	Percent
—	—	80%