

# COUNTDOWN Challenge

## Symmetry

*Draw the indicated number of lines to show symmetry.*

Lines of  
Symmetry

Polygon


1




2



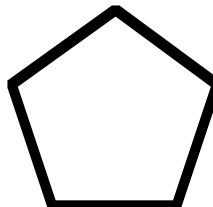
3



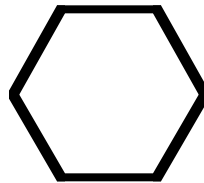
4



5



6



$\infty$

