
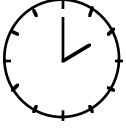
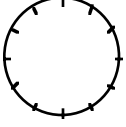
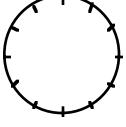
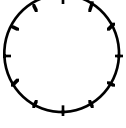
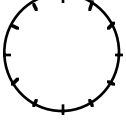
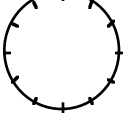
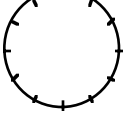
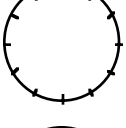
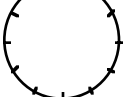


COUNTDOWN Challenge

Measuring Angles

Use the hands on a clock to help measure angles. Complete the chart below.

<u>Picture</u>	<u>Time</u>	<u>Degrees</u>	<u>Proportion</u>
	1:00	30°	$\frac{1}{12} = \frac{30}{360}$
	2:00	60°	$\frac{2}{12} = \frac{60}{360}$
	3:00	90°	$\frac{3}{12} = \frac{90}{360}$
	4:00	_____	___ = ___
	5:00	_____	___ = ___
	6:00	_____	___ = ___
	7:00	_____	___ = ___
	8:00	_____	___ = ___
	9:00	_____	___ = ___
	10:00	_____	___ = ___